









Chasing Pictures in Hövelhof. Find the following pictures on the given tour


<p>A</p> 	<p>B</p> 
<p>Number of those objects</p>	<p>Turn around 90° to the left. How many letters do you count before "e.V."</p>
<p>A=</p>	<p>B=</p>
<p>C</p> 	<p>D</p> 
<p>House number</p>	<p>Find the hidden number</p>
<p>C=</p>	<p>D=</p>
<p>E</p> 	<p>F</p> 
<p>Number of those objects (in case you count a two-digit number, just use its half)</p>	<p>Number of windows</p>
<p>E=</p>	<p>F=</p>
<p>G</p> 	<p>H</p> 
<p>Number of letters on green background at the top (just one side). You'll find this picture at the end of the tour.</p>	<p>House number</p>



How many bridges do you count?



Add up the 5 digits that are painted over



Number of letters of the last name of the woman.



Number in the last line



What kind of tree is this? Number of letters



Sum of all digits on the signs

M=

N=

A		B	
C		D	
E		F	
G		H	
I		J	
K		L	
M		N	

Sum of all variables:
XYZ: _____
 (Digital root = 13)

Final at:
 N 51° 49.732-XYZ E 8° 39.XYZ+49